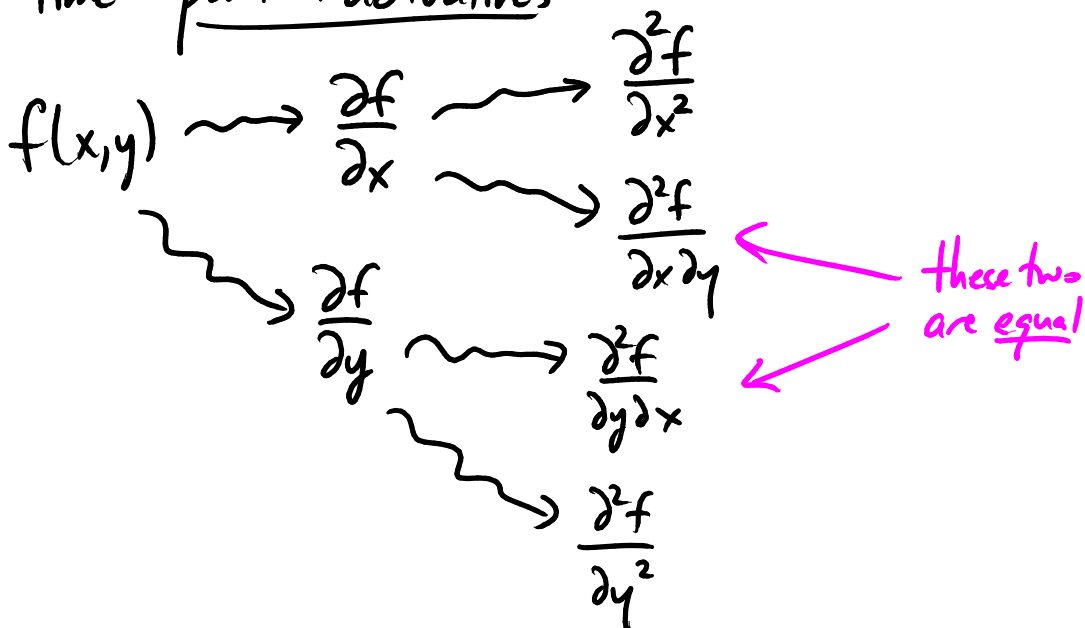


Last time: partial derivatives



Notation:

$$\frac{\partial f}{\partial x} = f_x$$

$$\frac{\partial f}{\partial y} = f_y$$

$$\frac{\partial^2 f}{\partial x^2} = f_{xx}$$

$$\frac{\partial^2 f}{\partial x \partial y} = f_{xy}$$

$$\frac{\partial^2 f}{\partial y \partial x} = f_{yx}$$

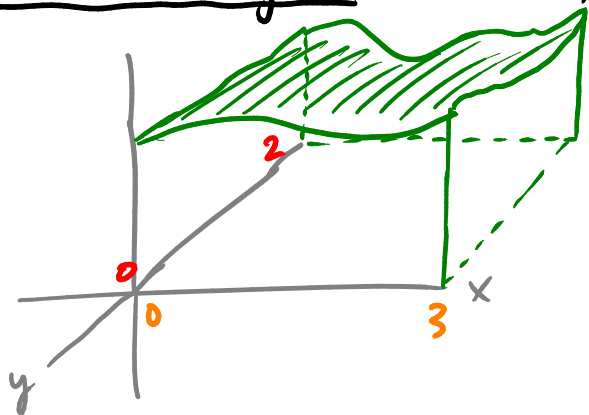
$$\frac{\partial^2 f}{\partial y^2} = f_{yy}$$

$$f_{xy} = f_{yx}$$

Terminology: If $f(x,y)$ = productivity
 where x = capital
 y = labor

Then f_x is called marginal productivity of capital
 f_y is " " " of labor

Iterated integrals (Ch 16.2)



Surface $z = f(x, y)$

[like $y = f(x)$]

In 1-variable calc, we studied area under the curve $y = f(x)$

Now study volume under the surface

$$z = f(x, y)$$

Cut by planes at fixed y : $V = \int_0^2 A(y) dy$

cross section area

$$A(y) = \int_0^3 f(x, y) dx \text{ gives the cross section (as usual)}$$

$$\text{So } V = \int_0^2 \left[\int_0^3 f(x, y) dx \right] dy$$

Ex Suppose $f(x, y) = 4xy + 3x^2$

$$\text{Then } V = \int_0^2 \left[\int_0^3 4xy + 3x^2 dx \right] dy$$

$$= \int_0^2 \left[2x^2y + x^3 \Big|_{x=0}^{x=3} \right] dy$$

$$= \int_0^2 (18y + 27 - 0) dy$$

$$= 9y^2 + 27y \Big|_{y=0}^{y=2}$$

$$= 36 + 54 = \underline{\underline{90}}$$

We could also try doing the \int 's in the other order:

$$\begin{aligned} V &= \int_0^3 \left[\int_0^2 4xy + 3x^2 dy \right] dx \\ &= \int_0^3 \left[2xy^2 + 3x^2y \Big|_{y=0}^{y=2} \right] dx \\ &= \int_0^3 8x + 6x^2 dx \\ &= 4x^2 + 2x^3 \Big|_{x=0}^{x=3} \\ &= 36 + 54 = \underline{\underline{90}} \end{aligned}$$

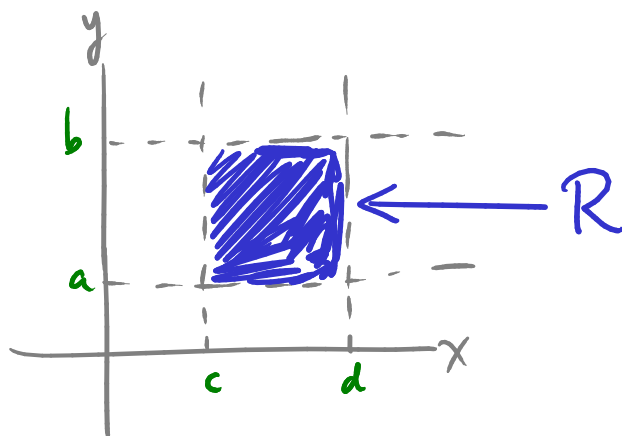
Notice, answer doesn't depend on the order:

$$\int_a^b \left[\int_c^d f(x,y) dx \right] dy = \int_c^d \left[\int_a^b f(x,y) dy \right] dx$$

("Fubini's Theorem")

We also write it as

$$\iint_R f(x,y) dA$$



Ex If $R = \{1 \leq x \leq 2, 0 \leq y \leq \pi\}$ and $f(x,y) = y \sin(xy)$

What is $\iint_R f(x,y) dA$?

It is $\int_0^\pi \left[\int_1^2 y \sin(xy) dx \right] dy$

(or: $\int_1^2 \left[\int_0^\pi y \sin(xy) dy \right] dx$, but that's harder to calculate)

$$= \int_0^\pi \left(-\cos(xy) \Big|_{x=1}^{x=2} \right) dy$$

$$= \int_0^\pi \left(-\cos(2y) + \cos(y) \right) dy$$

$$= -\frac{1}{2} \sin(2y) + \sin(y) \Big|_{y=0}^{y=\pi}$$

$$= \underline{\underline{0}}$$

Ex Find the volume of the solid which lies under the graph of

$$z = f(x, y) = 4 + x^2 - y^2$$

and over the rectangle $\left. \begin{array}{l} -1 \leq x \leq 1 \\ 0 \leq y \leq 2 \end{array} \right\}$ (call this rectangle R)

$$V = \iint_R f(x, y) \, dA$$

$$= \iint_R 4 + x^2 - y^2 \, dA$$

$$= \int_{-1}^1 \left[\int_0^2 4 + x^2 - y^2 \, dy \right] dx$$

$$= \int_{-1}^1 \left[4y + x^2y - \frac{1}{3}y^3 \Big|_{y=0}^{y=2} \right] dx$$

$$= \int_{-1}^1 \left[\left(8 + 2x^2 - \frac{8}{3} \right) - 0 \right] dx$$

$$= \int_{-1}^1 \left(\frac{16}{3} + 2x^2 \right) dx$$

$$= \left. \frac{16}{3}x + \frac{2}{3}x^3 \right|_{-1}^1 = 6 + 6 = \underline{\underline{12}}$$